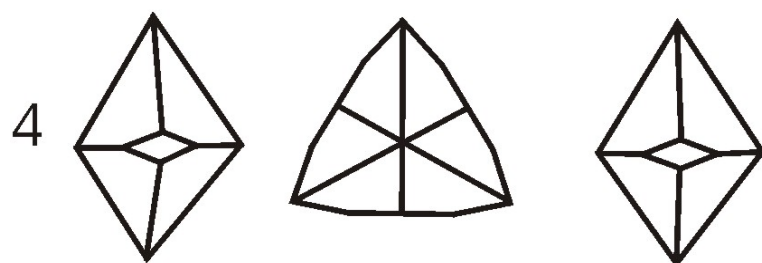





Symmetry 2

Stereo Diagrams

1. Draw stereo diagrams for the yellow house and tan-dingus cardboard crystal models.

2. The views below are different views of four different crystal shapes. What point group and crystal system do each of the four belong to?



3. Consider the following eight blocks:
 10 and 89 - dark brown
 91, 83, 87, 84, 68, 90 - light brown

Which of the blocks matches each of the four stereo diagrams shown below?

